

Name: _____

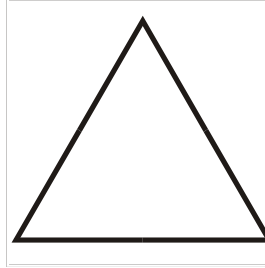
Identify the polygons.

1.




Trapezoid

2.



Equilateral Triangle

3.



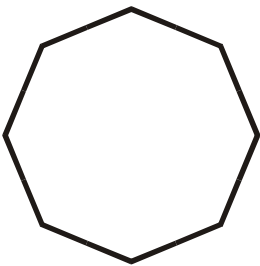
Square

4.



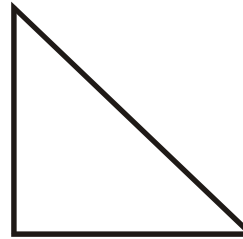
Rectangle

5.



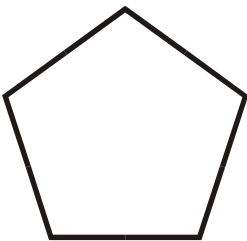
Regular Octagon

6.



Right Triangle

7.




Regular Pentagon

8.



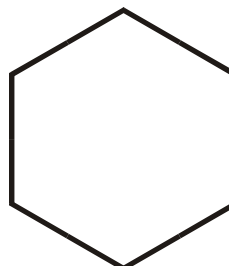
Parallelogram

9.



Isosceles Triangle

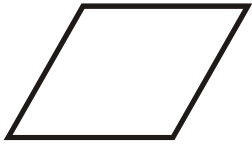
10.



Regular Hexagon

Name: _____

11.



Rhombus

12.



Scalene Triangle
