

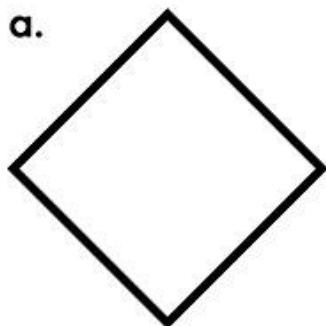
Name: _____

Drawing Lines of Symmetry

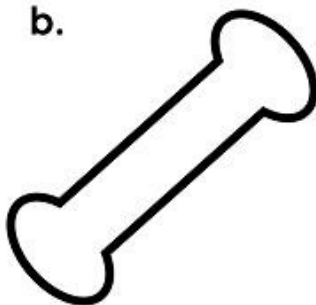
Symmetry

Draw lines of symmetry on the shapes below. Some shapes may have more than one line of symmetry.


a.




b.



c.



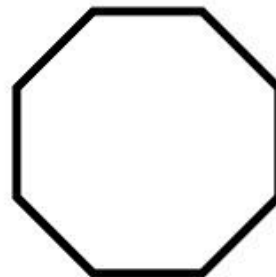
d.




e.



f.



g.



h.



i.



Symmetry - ANSWER KEY

Draw lines of symmetry on the shapes below. Some shapes may have more than one line of symmetry.

